

If you had 20 glass bottles and 13 plastic bottles, how many bottles are there altogether?




twinkl.com

If you had 27 milkshakes and 10 fizzy drinks, how many drinks do you have in total?




twinkl.com

If you had 24 squares of chocolate and 5 chocolate fingers, how many do you have in total?



twinkl.com

If you have 40 blackbirds and 9 robins in your garden, how many are there?



twinkl.com

If you had 15 cherry cakes and 10 plain cakes, how many would you have altogether?



twinkl.com

If you had 75 books and 6 magazines, how many do you have?




twinkl.com

If you had 52 jelly beans and 4 lollipops, how many would you have in total?




twinkl.com

If you had 26 hotdogs and 3 portions of chips, how many would you have altogether?




twinkl.com

If you had 33 marbles and 5 dice, how many do you have in total?



twinkl.com

If you had 41 apples and 8 pears, how many do you have?




twinkl.com

If you had 81 milk cartons and 9 juice cartons, how many would you have altogether?



twinkl.com

If you have 60 boiled eggs and 6 fried eggs, how many would you have in total?



twinkl.com