
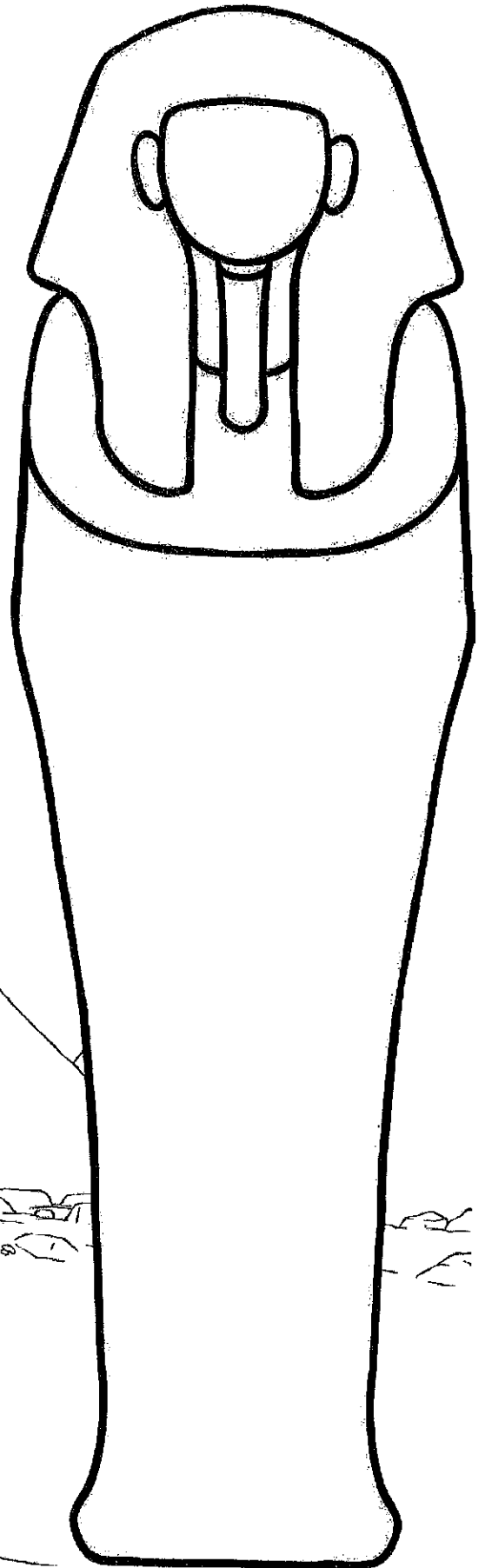


# Design an Egyptian Sarcophagus






















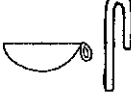





Use the hieroglyph alphabet below to design your own Egyptian Sarcophagus, remember to write messages that keep grave robbers away!







A	B	C	D	E	F	G	H	I	J	K	L	M
and V												
N	O	P	Q	R	S and X	T	U and W	Y	Z	SH	CH	










# Crack the Egyptian God Names







Crack the names of the Egyptian Gods below:

 A	 B	 C	 D	 E	 F	 G	 H	 I	 J
 K	 L	 M	 N	 O	 P	 Q	 R	 S	 T
 U and W	 X	 V	 Y	 Z	 SH	 CH			

- 







---
- 






---
- 



---
- 







---

5. Now write your own name:

---



---



---



---

# Adding 4-Digit Numbers with Carrying

LO: I can add 4-digit numbers with carrying.

$$\begin{array}{r} 1 \quad 4078 \\ + 7806 \\ \hline \end{array}$$

$$\begin{array}{r} 2 \quad 3020 \\ + 7033 \\ \hline \end{array}$$

$$\begin{array}{r} 3 \quad 8389 \\ + 2094 \\ \hline \end{array}$$

$$\begin{array}{r} 4 \quad 1938 \\ + 8398 \\ \hline \end{array}$$

$$\begin{array}{r} 5 \quad 8784 \\ + 9969 \\ \hline \end{array}$$

$$\begin{array}{r} 6 \quad 8580 \\ + 1887 \\ \hline \end{array}$$

$$\begin{array}{r} 7 \quad 9771 \\ + 8489 \\ \hline \end{array}$$

$$\begin{array}{r} 8 \quad 5602 \\ + 9250 \\ \hline \end{array}$$

$$\begin{array}{r} 9 \quad 2851 \\ + 2330 \\ \hline \end{array}$$

$$\begin{array}{r} 10 \quad 8976 \\ + 7249 \\ \hline \end{array}$$

$$\begin{array}{r} 11 \quad 6942 \\ + 3220 \\ \hline \end{array}$$

$$\begin{array}{r} 12 \quad 7238 \\ + 5733 \\ \hline \end{array}$$

$$\begin{array}{r} 13 \quad 4265 \\ + 8270 \\ \hline \end{array}$$

$$\begin{array}{r} 14 \quad 8811 \\ + 2787 \\ \hline \end{array}$$

$$\begin{array}{r} 15 \quad 1899 \\ + 8179 \\ \hline \end{array}$$

$$\begin{array}{r} 16 \quad 6073 \\ + 6379 \\ \hline \end{array}$$

Challenge:

$$\begin{array}{r} 1 \quad 2\_32 \\ + 31\_ \\ \hline \_28\_ \end{array}$$

$$\begin{array}{r} 2 \quad 96\_ \\ + 6\_80 \\ \hline \_ \_ 197 \end{array}$$

$$\begin{array}{r} 3 \quad 25\_7 \\ + \_39\_ \\ \hline 7\_65 \end{array}$$

$$\begin{array}{r} 4 \quad 8\_2\_ \\ + \_060 \\ \hline \_08\_1 \end{array}$$

# Subtracting 4-Digit Numbers With Exchanging

LO: I can subtract with 4-digit numbers

$$\begin{array}{r} 1 \quad 7894 \\ - 3918 \\ \hline \\ \hline \end{array}$$

$$\begin{array}{r} 2 \quad 7425 \\ - 6773 \\ \hline \\ \hline \end{array}$$

$$\begin{array}{r} 3 \quad 9882 \\ - 6443 \\ \hline \\ \hline \end{array}$$

$$\begin{array}{r} 4 \quad 6746 \\ - 5816 \\ \hline \\ \hline \end{array}$$

$$\begin{array}{r} 5 \quad 6873 \\ - 5175 \\ \hline \\ \hline \end{array}$$

$$\begin{array}{r} 6 \quad 7043 \\ - 5878 \\ \hline \\ \hline \end{array}$$

$$\begin{array}{r} 7 \quad 7861 \\ - 7200 \\ \hline \\ \hline \end{array}$$

$$\begin{array}{r} 8 \quad 9803 \\ - 1985 \\ \hline \\ \hline \end{array}$$

$$\begin{array}{r} 9 \quad 7327 \\ - 5309 \\ \hline \\ \hline \end{array}$$

$$\begin{array}{r} 10 \quad 7178 \\ - 2906 \\ \hline \\ \hline \end{array}$$

$$\begin{array}{r} 11 \quad 5637 \\ - 4447 \\ \hline \\ \hline \end{array}$$

$$\begin{array}{r} 12 \quad 2877 \\ - 2498 \\ \hline \\ \hline \end{array}$$

$$\begin{array}{r} 13 \quad 7450 \\ - 3219 \\ \hline \\ \hline \end{array}$$

$$\begin{array}{r} 14 \quad 7723 \\ - 6962 \\ \hline \\ \hline \end{array}$$

$$\begin{array}{r} 15 \quad 6527 \\ - 4450 \\ \hline \\ \hline \end{array}$$

$$\begin{array}{r} 16 \quad 5568 \\ - 2319 \\ \hline \\ \hline \end{array}$$

Challenge:

$$\begin{array}{r} 1 \quad 9\_45 \\ - \_5\_6 \\ \hline 171\_ \\ \hline \end{array}$$

$$\begin{array}{r} 2 \quad 26\_5 \\ - 1\_6\_ \\ \hline \_368 \\ \hline \end{array}$$


$$\begin{array}{r} 3 \quad \_5\_7 \\ - 2\_2\_ \\ \hline 4971 \\ \hline \end{array}$$

$$\begin{array}{r} 4 \quad 2\_8 \\ - \_63\_ \\ \hline 1075 \\ \hline \end{array}$$


# Year 3 Multiplication and Division

## Word Problems x3 x4 x8

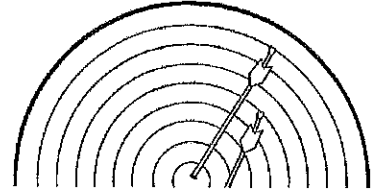
1. How many wheels would 9 tricycles have?




2. 24 people travel to an airport in taxis. 4 people travel in each taxi. How many taxis are used?



3. Hanan is a keen archer. One day she shoots 5 arrows. Each arrow scores an 8. What is her total score?



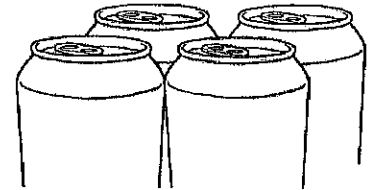
4. Three judges award 27 marks overall. They each give the same score. What score did they each give?




5. Cinema tickets are £8. Six people go to see a film. How much will they pay altogether?



6. Cans of lemonade are sold in packs of 4. Cherie wants 36 cans for a party. How many packs should she buy?




7. Trish, Karen and Layla share equally a packet of nuts. There are 21 nuts in the pack. How many nuts do each get?



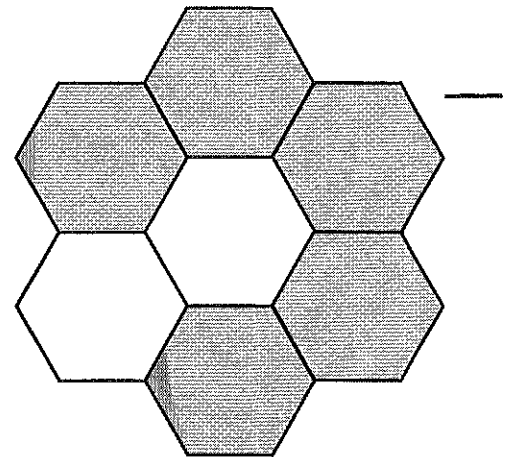
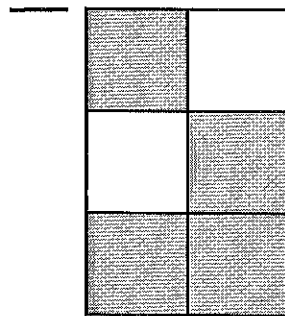
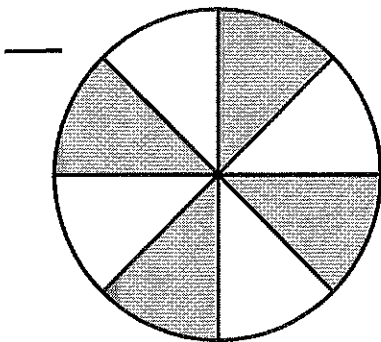

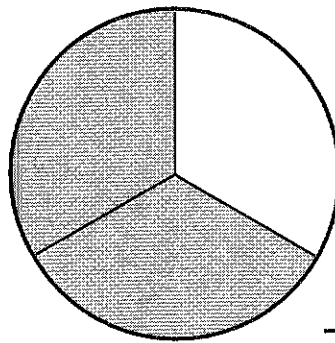

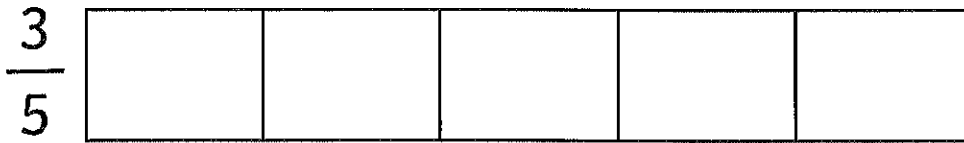
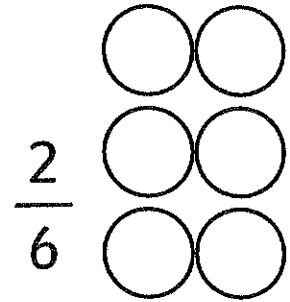
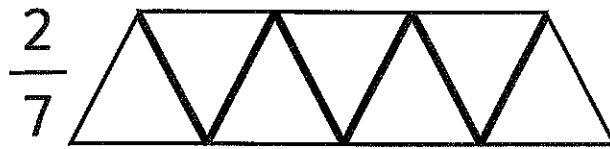
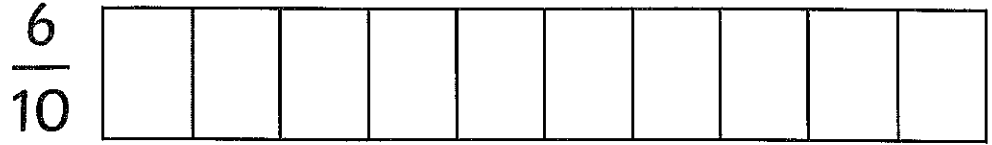
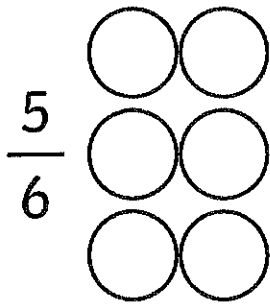
8. A machine making mango pieces puts 8 pieces in each snack packet. The machine makes 88 pieces in 1 minute. How many packets are filled every minute?

9. A carpenter makes tables. Some have 3 legs and some have 4 legs. He plans to make 5 tables with 3 legs, and 4 tables with 4 legs. How many legs will he need?



# Colour and Label Fractions

Colour and label correctly:



# Colour by Multiplication

Do the multiplication calculation and colour the shape in the correct colour.

0-10

light blue

11-20

purple

21-30

pink

31-40

yellow

41-50

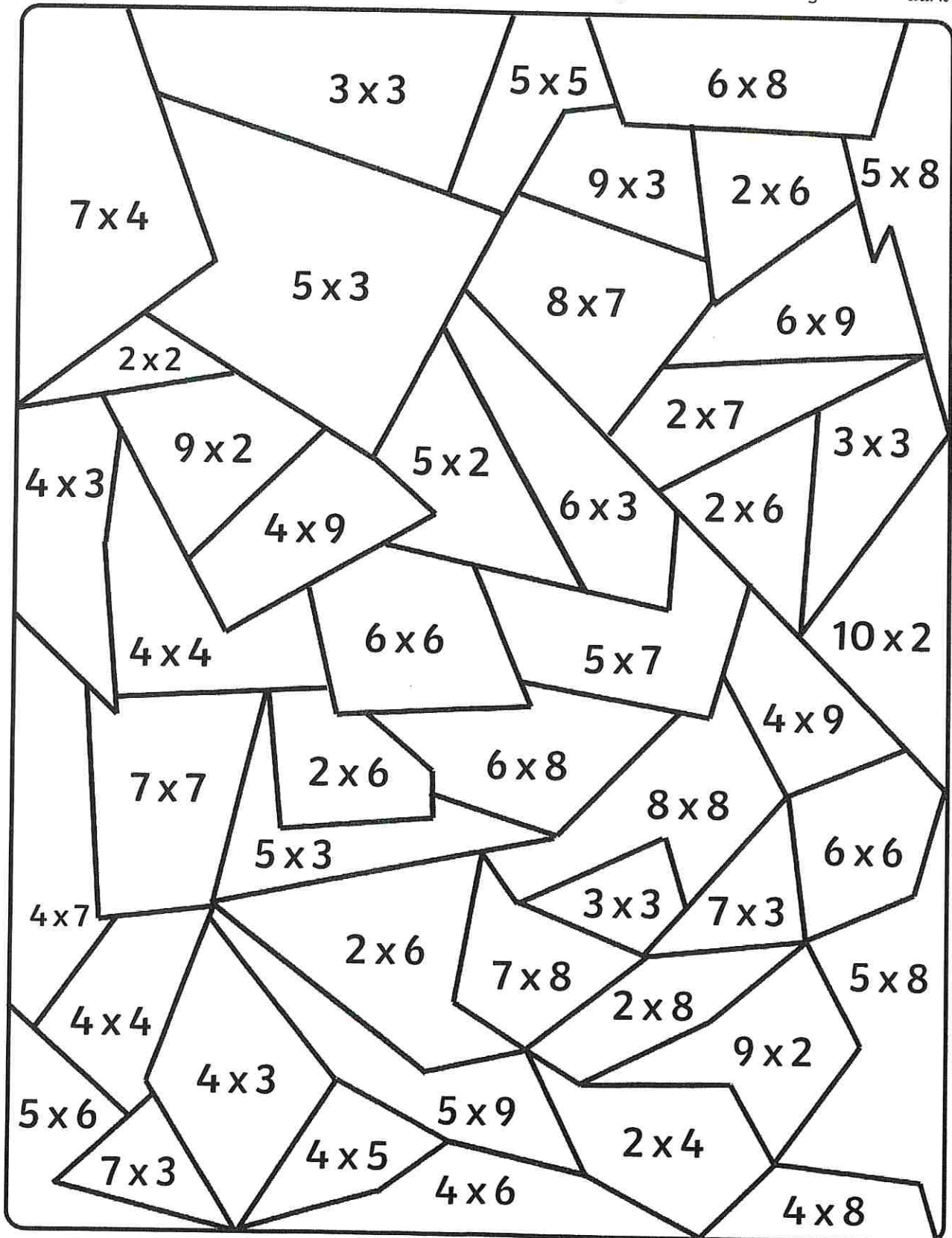
green

51-60

orange

61-70

dark blue










# Get Ready with Cleopatra

11 To look as fabulous as me, follow these simple beauty steps.  
22 First, bathe in milk and honey to keep your skin nourished  
34 and soft. I scrub away the dead skin using sea salt and  
47 then I like to use crushed green grapes to give my skin a  
49 golden glow.  
60 I usually keep my makeup quite simple and natural. I crush  
72 up lapis lazuli stone to create a deep blue eye shadow base  
83 and then I add some sparkle with little chunks of gold  
92 pyrite. Next, I make my eyelashes and eyebrows darker  
103 using charcoal and animal fat. Then, I just rub some red  
115 clay into my lips and cheeks and I'm ready to head down  
121 to the pyramids for the day.



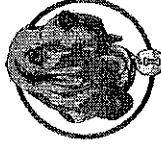
# Quick Questions



1. Through whose eyes is this text told?



2. Find and copy a phrase which shows that Cleopatra thinks that she looks good.



3. 'I usually keep my makeup quite simple and natural.' What makes you think that this is not true?



4. Explain why Cleopatra does not use the same makeup products that women use today.

# Friendly Felines


10 Cats were considered to be sacred, or holy, in ancient  
19 Egyptian society and helped humans just as much as  
22 humans helped them.

31 The ancient Egyptians were skilled farmers and grew many  
41 crops, such as wheat and grains, in the nutrient-rich soil  
51 close to the River Nile. However, the wheat would attract  
56 mice, rats and snakes, which  
60 were dangerous to humans.

65 To solve this problem, the  
68 ancient Egyptians would  
74 leave food, such as fish heads,  
80 outside to tempt cats to visit.

86 When the cats came, they ate  
92 the food and scared away any  
97 vermin around the food stores.

103 After a short amount of time,  
108 cats were welcomed into the  
113 house and lived happily with  
116 their human friends.



# Quick Questions

1. Find and copy two adjectives which show that Egyptians thought that cats were special.



2. What is the main point of the third paragraph?



3. What does 'nutrient-rich' tell you about the soil close to the River Nile?



4. Where in this text can I find information about the types of crop grown by ancient Egyptians?

